

# Maths Routine for Feb/21

Date.....  
Page.....

Q(1)

Missing no - 1 to 30



1    3    5    7    9   



12    14    16    18    20



21    23    25    27    29

Q(2)

Count and write 1 to 20

1.  = 8    4.  = 5

2.  = 10    5.  = 9

3.  = 14     = 12

Q(4)

What comes after (+50)

1) 1    4) 15    9) 38

5) 20    10) 42

2) 7    6) 25    11) 46

7) 28    12) 48

3) 11    8) 34    13) 10