



Exercise


A) Write the time shown in the clocks.




3 o'clock




10 o'clock




1 o'clock



5 o'clock

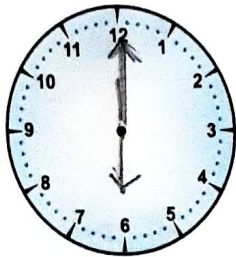


11 o'clock

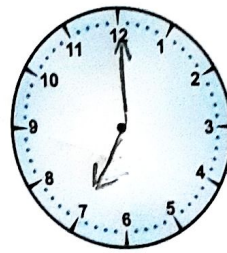


7 o'clock

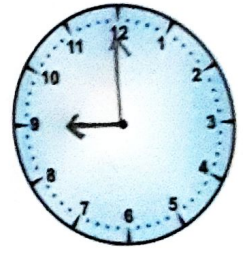
B) Draw the hands of the clocks to tell the given time.



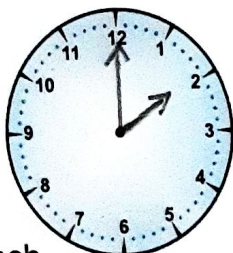
We get up at 6 o'clock.




We go to school at 7 o'clock.




Father goes to office at 9 o'clock.



We eat our lunch at 2 o'clock.



We play at 4 o'clock.



We go to bed at 9 o'clock.

(C) Match the time with the watch showing that time.

The image shows a central vertical list of times on a light blue background. To the left and right of this list are several analog watches of different colors. Lines connect each watch to the time it displays.

Central List of Times:

- 3 o'clock
- 8 o'clock
- 10 o'clock
- 1 o'clock
- 5 o'clock
- 2 o'clock
- 12 o'clock
- 6 o'clock
- 9 o'clock
- 4 o'clock

Watches and their corresponding times:

- Top-left watch (white face, black hands) shows 10 o'clock.
- Second watch from top-left (red face, black hands) shows 1 o'clock.
- Third watch from top-left (green face, black hands) shows 2 o'clock.
- Fourth watch from top-left (red face, black hands) shows 12 o'clock.
- Fifth watch from top-left (green face, black hands) shows 9 o'clock.
- Top-right watch (yellow face, black hands) shows 3 o'clock.
- Second watch from top-right (orange face, black hands) shows 8 o'clock.
- Third watch from top-right (yellow face, black hands) shows 5 o'clock.
- Fourth watch from top-right (orange face, black hands) shows 6 o'clock.
- Fifth watch from top-right (yellow face, black hands) shows 4 o'clock.

Chapter - 11. Measurement

Fill in the blanks:

1. There are seven days in a week.
2. A year has 12 months
3. 52 weeks make a year
4. There are 365 days in a year.
5. The year divisible by four is a leap year.
6. There are 29 days in a leap year.
7. The clock has numbers 1 to 12 written on it.
8. The long hand is the minute hand.
9. The short hand is the hour hand.
10. The month with minimum days is February.
11. Capacity of a vessel tells us how much it can hold/contain
12. A leap year has 366 days.